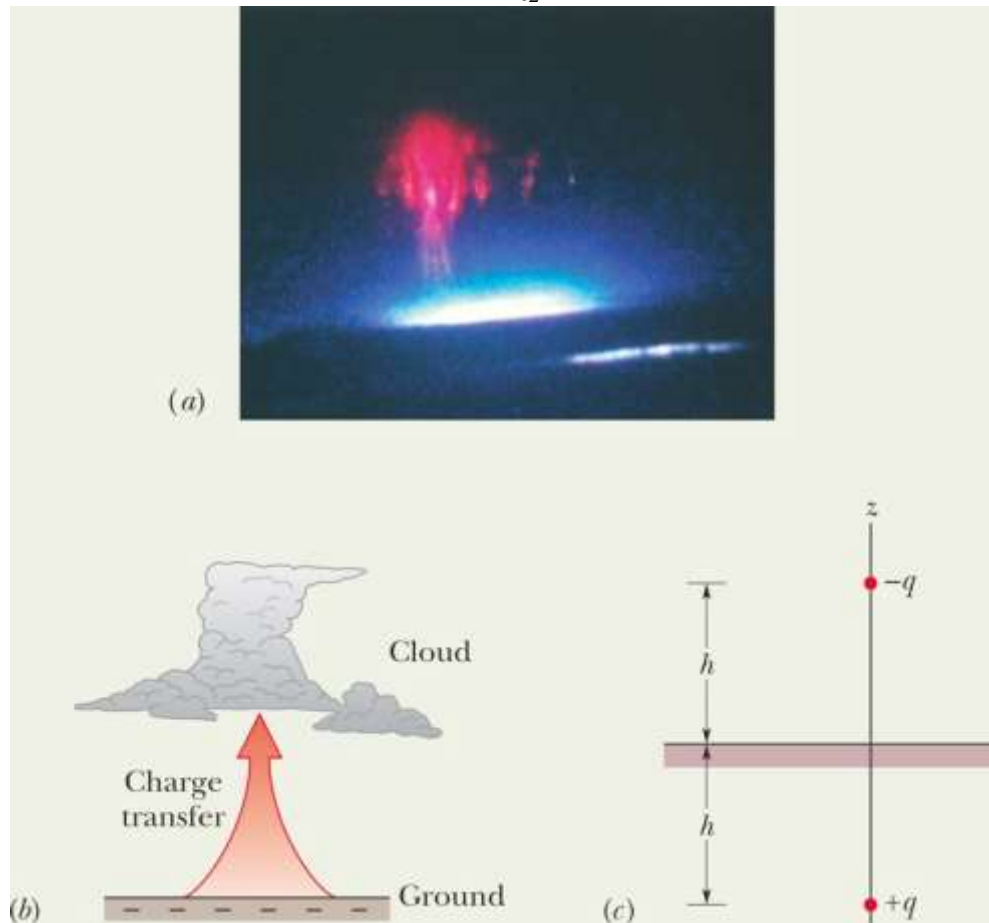


Home Work 2

1. Electric dipole and atmospheric sprites

Sprites ([Fig. 22-9a](#)) are huge flashes that occur far above a large thunderstorm. They were seen for decades by pilots flying at night, but they were so brief and dim that most pilots figured they were just illusions. Then in the 1990s sprites were captured on video. They are still not well understood but are believed to be produced when especially powerful lightning occurs between the ground and storm clouds, particularly when the lightning transfers a huge amount of negative charge $-q$ from the ground to the base of the clouds ([Fig. 22-9b](#)).

Just after such a transfer, the ground has a complicated distribution of positive charge. However, we can model the electric field due to the charges in the clouds and the ground by assuming a vertical electric dipole that has charge $-q$ at cloud height h and charge $+q$ at below-ground depth h ([Fig. 22-9c](#)). If $q = 200 \text{ C}$ and $h = 6.0 \text{ km}$, what is the magnitude of the dipole's electric field at altitude $z_1 = 30 \text{ km}$ somewhat above the clouds and altitude $z_2 = 60 \text{ km}$ somewhat above the stratosphere?



(a) Photograph of a sprite. (Courtesy NASA)

(b) Lightning in which a large amount of negative charge is transferred from ground to cloud base.

(c) The cloud-ground system modeled as a vertical electric dipole.

2. In Fig. [22-8](#), let both charges be positive. Assuming $z \gg d$, show that E at point P in that figure is then given by

$$E = \frac{1}{4\pi \epsilon_0} \frac{2q}{z^2}.$$

3. In Fig. [22-51](#), a “semi-infinite” nonconducting rod (that is, infinite in one direction only) has uniform linear charge density λ . Show that the electric field \mathbf{E}_p at point P makes an angle of 45° with the rod and that this result is independent of the distance R . (*Hint*: Separately find the component of \mathbf{E}_p parallel to the rod and the component perpendicular to the rod.)

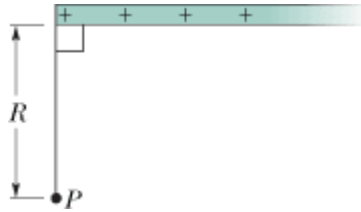


Figure 22-51 Problem [33](#).

4. A thin nonconducting rod with a uniform distribution of positive charge Q is bent into a circle of radius R (Fig. [22-43](#)). The central perpendicular axis through the ring is a z axis, with the origin at the center of the ring. What is the magnitude of the electric field due to the rod at (a) $z = 0$ and (b) $z = \infty$? (c) In terms of R , at what positive value of z is that magnitude maximum? (d) If $R = 2.00$ cm and $Q = 4.00$ μC , what is the maximum magnitude?

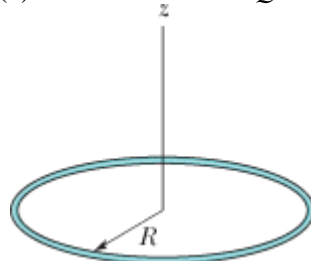


Figure 22-43 Problem [24](#).

5. Find an expression for the oscillation frequency of an electric dipole of dipole moment \vec{p} and rotational inertia I for small amplitudes of oscillation about its equilibrium position in a uniform electric field of magnitude E .